

SECTION A

1. Which element of a map helps to interpret map symbols?

2. Name the domestic animal which provides security at home.

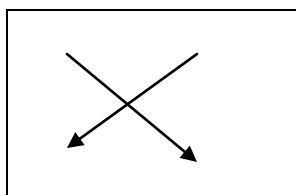
3. Mention any one element of weather.

4. What is the main work of the police in our community?

5. Name the main economic activity carried out around lakes and rivers.

6. From which plant do we get sugar? _____

7. Name the map symbol drawn below.



8. How is corona virus (COVID 19) dangerous to people?

9. State any one way of preserving culture.

10. Name any one district found in central Uganda.

11. Why are children given names? _____

12. Give any one use of a radio at home.

13. How are games and sports useful at school?

14. Name the compass direction opposite North East.

15. Mention any one local material used for making pots.

16. In which district is your school located?

17. What name do we give to a drawing as seen from sides?

18. Name any one important place found in your district.

19. What is a valley? _____

20. How is a market place important to people?

21. Name the clouds which give us rain.

22. What is vegetation?

23. Give one tribe under the Bantu ethnic group.

24. How do people keep money safe?

25. Apart from cyclonic rainfall, mention any one type of rainfall.

26. Write down one instrument found at a weather station.


27. State one use of forests to people.

28. Mention one example of a semi-cardinal point.

29. What do we call things that people use to meet their needs?

30. Give any one use of hills to people.

31. Name the road signs below.



32. State any one problem faced by people living on Islands.

33. What term is used to mean things made out of local materials using hands? _____

34. Give any one problem facing farmers in our community.

35. Write SST in full.

For questions 36 to 40, answer Christianity or Islamic but not both:

36. **Either:** State the Holy book for Christians.

OR: State the Holy book for Muslims _____

37. **Either:** What did God create to give us light during day?

OR: What did Allah create to give us light during day?

38. **Either:** What day marks the beginning of lent period?

OR: What day marks the end of Ramadan?

39. **Either:** On which river was Jesus baptized? _____

OR: Name the mountain on which Prophet Muhammed received the Quran.

40 **Either:** Who was the earthly father of Jesus Christ?

b) Who was the mother of Prophet Muhammad? _____

SECTION B

41.a)What do we call the state of atmosphere at a given time and place?

b) Write down any two elements of weather.

(i)_____

(ii)_____

c) Which weather element makes people to carry umbrellas?

42.a) What are physical features? _____

b) Give any two physical features in your district.

(i) _____

(ii) _____

c) Give any one use of rivers to people.

43. Give the meaning of the term transport.

b) Name any two types of transport.

(i) _____

(ii) _____

c) How is transport useful to people?

44.a)What is a swamp?

b) State two uses of swamps to people.

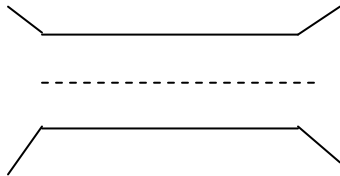
(i) _____

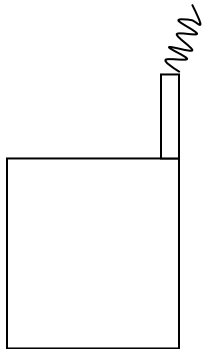
(ii) _____

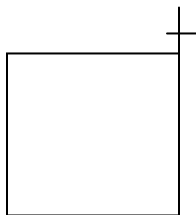
c) Mention the commonest type of fish caught in swamps.

45.a) What is a map?

b) Name the map symbol drawn below.







46.a)What are economic activities?

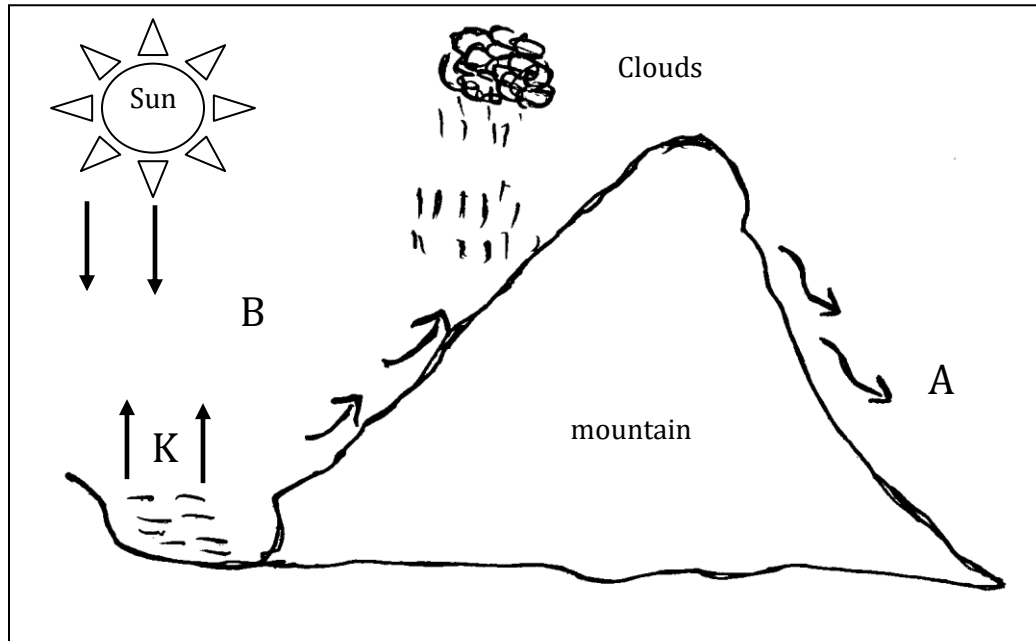
b) Name two economic activities done in your district.

(i) _____

(ii) _____

c) Why do some people fail to carry out economic activities.

47. Use the diagram below and answer questions that follow.



a) Name the type of rain fall shown above.

b) Mention the process that takes place at K.

c) Give any one economic activity that can take place on side B of the mountain above. _____

d) How is rainfall useful to farmers?

48. What is a clan? _____

b) Mention three clan symbols.

(i) _____

(ii) _____

(iii) _____

49. Match list A with list B correctly.

A

B

cotton	ropes
Sugarcane	cigarettes
Tobacco	clothes
sisal	sugar

Correct order

(i) Cotton _____

(ii) Sugarcane _____

(iii) Tobacco _____

(iv) Sisal _____

50.a) What are legends?

b) Give any two legends you know.

(i) _____

(ii) _____

c) How are legends important to a P.4 child?

For questions 51 to 55, answer Either Christianity or Islamic but but NOT both alternatives on a number.

51 **Either:** a) What is the name given to the three persons in one God?

b) Mention the three persons of the Holy Trinity.

(i) _____

(ii) _____

(iii) _____

OR: a) What is Islam?

b) Write down any two books in Islam.

(i) _____

(ii) _____

c) Which book was revealed to Prophet Muhammad?

52. **Either:** a) Which prayer did Jesus teach his apostles?

b) How is a prayer important to Christians?

c) Why do Christians sing in the church during prayers?

OR: a) Which special prayer do Muslim believers perform every Friday?

b) How is a prayer important to Muslims?

i) _____

ii) _____

c) Write down any one thing that spoils prayers.

53. **Either:** a) Name the two parts of the Bible.

(i) _____

(ii) _____

b) Give one reason why Christians read the Bible.

c) Name the first book of the Holy Bible. _____

OR: a) Which Prophet received the Quran? _____

b) Give two reasons why Muslims read the Quran?

(i) _____

(ii) _____

c) Name the mountain on which the first revelation of the Quran was received. _____

54. **Either:** Match A with B correctly.

A

B

- | | |
|--------------------|--------------------------------------|
| (i) Judas Iscariot | _ replaced Judas Iscariot |
| (ii) Matthias | - doubted the resurrection of Jesus. |
| (iii) Thomas | - the rock |
| (iv) Peter | - betrayed Jesus Christ. |

Correct order.

- (i) Judas Iscariot _____
- (ii) Matthias _____
- (iii) Thomas _____
- (iv) Peter _____

OR: **Match A with B correctly**

A

B

- | | |
|----------------------|----------------------|
| (i) Prophet Muhammad | _ received the injir |
| (ii) Prophet Dauda | - received the Quran |
| (iii) Prophet Isa | - received the zabur |
| (iv) Prophet Musa | - received Tauret |
- (i) Prophet Muhammad _____
- (ii) ii) Prophet Dauda _____
- (iii) Prophet Isa _____
- (iv) Prophet Musa _____

55. For both

a) Write any two ways how one can show love.

(i) _____

(ii) _____

b) Mention any two ways how Jesus showed love to people.

(i) _____

(ii) _____

*** END ***